







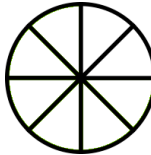
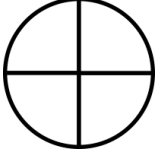

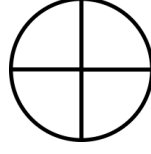
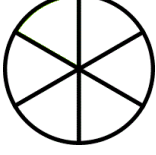

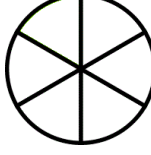







الاسم: \_\_\_\_\_ الصف: \_\_\_\_\_

### مقارنة كسور لها نفس المقام

ضع اشارة < او > بين الكسور التالية , يمكن الاستعانة بالتلوين في الدوائر:

	$\frac{1}{3}$		$\frac{2}{3}$	
	$\frac{4}{5}$		$\frac{1}{5}$	
	$\frac{5}{8}$		$\frac{3}{8}$	
	$\frac{1}{4}$		$\frac{3}{4}$	
	$\frac{2}{6}$		$\frac{4}{6}$	
	$\frac{9}{10}$		$\frac{6}{10}$	
	$\frac{2}{7}$		$\frac{5}{7}$	